



# Note Names Worksheet

Treble Clef (or)  
G Clef

Names of the lines of the staff




Names of the spaces of the staff



E G B D F F A C E

Cover the top half of the paper, and name the notes listed below

5



\_\_\_\_\_

When you go up the staff, you go up the letters of the alphabet  
(You have to re-start after you get to "G")


14



A B C D E F G A...

When you go down the staff, you go backwards through the letters of the alphabet  
(You have to re-start after you get to "A")


15



G F E D C B A G

See if you can name these notes that go above and below the staff!

16



\_\_\_\_\_